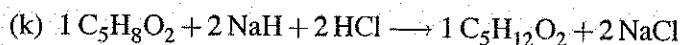
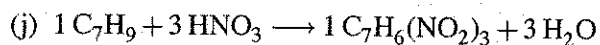
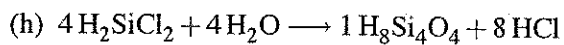
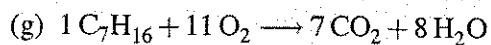
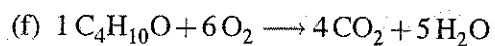
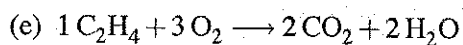
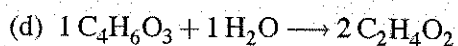
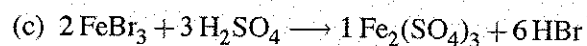
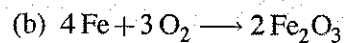
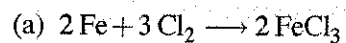


## Balancing Equations: Answers to Practice Problems

1. Balanced equations. (Coefficients equal to one (1) do *not* need to be shown in your answers).



## Balancing Equations: Practice Problems

1. Balance each of the following equations.

